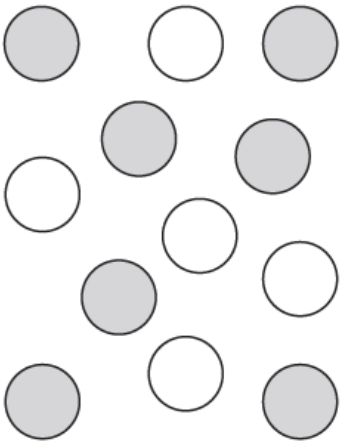




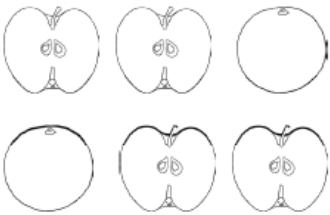
Monday

Red Group

1. For each group, write the ratio of one group compared to the other.

<p>What is the ratio of grey to white?</p>  <p>_____ : _____</p>	<p>What is the ratio of triangles to circles?</p>  <p>_____ : _____</p>	<p>What is the ratio of snakes to birds?</p>  <p>_____ : _____</p>
--	--	--

2. Complete each drawing so that it makes the ratio correct:

<p>Complete the drawing to show the ratio of oranges:apples <b>4:2</b></p>  <p>_____</p>	<p>Draw 40 letters (A and B) in total to the ratio of <b>A:B 2:3</b></p>	<p>There are 21 pieces of fruit in total – bananas and strawberries. Draw the pieces of fruit to make this ratio correct. <b>bananas:strawberries 2:1</b></p>
---	--	---

