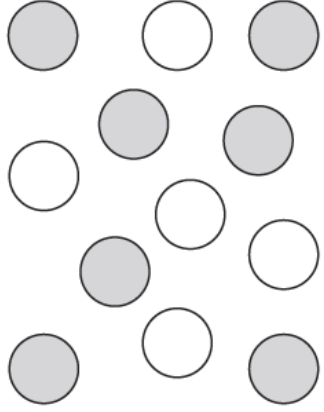




Monday


Blue Group



1. For each group, write the ratio of one group compared to the other.

<p>What is the ratio of grey to white?</p>  <p>_____</p> <p style="text-align: center;">:</p> <p>_____</p>	<p>What is the ratio of triangles to circles?</p>  <p>_____</p> <p style="text-align: center;">:</p> <p>_____</p>	<p>What is the ratio of snakes to birds?</p>  <p>_____</p> <p style="text-align: center;">:</p> <p>_____</p>
---	---	---

2. Complete each drawing so that it makes the ratio correct:

<p>Complete the drawing to show the ratio of oranges:apples 4:2</p> 	<p>Draw 20 letters (A and B) in total to the ratio of A:B 2:3</p>	<p>There are 15 pieces of fruit in total – bananas and strawberries. Draw the pieces of fruit to make this ratio correct. bananas:strawberries 2:1</p>
---	---	--

